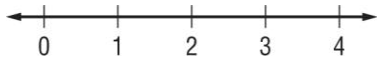


# Skills Practice

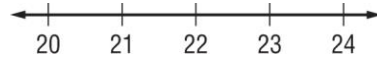
## Solve One-Step Inequalities

Solve each inequality. Graph the solution on a number line.

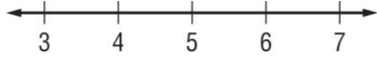
1.  $8x > 16$



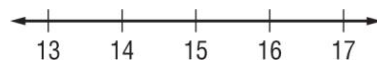
2.  $h - 9 > 13$



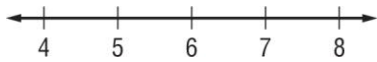
3.  $t + 7 \leq 12$



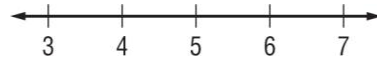
4.  $\frac{r}{3} \geq 5$



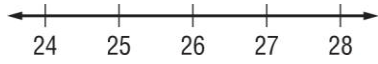
5.  $j + 4 < 10$



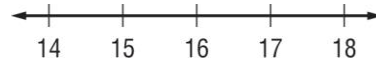
6.  $7y < 35$



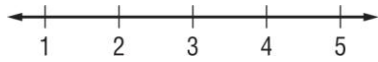
7.  $b - 15 > 11$



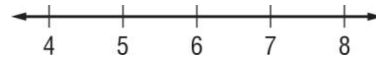
8.  $\frac{n}{4} < 4$



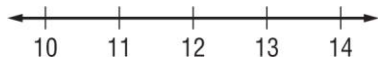
9.  $4b \geq 12$



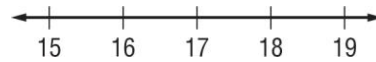
10.  $z + 8 \geq 14$



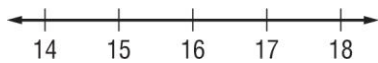
11.  $\frac{y}{6} \geq 12$



12.  $j - 8 < 9$



13.  $k - 10 \geq 6$



14.  $6z \geq 18$

