

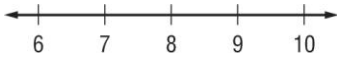
## Write and Graph Inequalities Skills Practice

Write an inequality for each sentence.

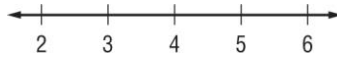
1. More than 40,000 fans attended the opening football game at the University of Florida.
2. Her earnings were no more than \$86.
3. A savings account balance is now less than \$550.
4. The number of club members is at least 25.
5. The spring calf class at the cattle show is for calves that weigh 825 pounds or less.
6. The minimum deposit for a new checking account is \$75.

Graph each inequality on the number line.

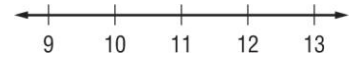
7.  $a < 8$



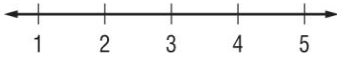
8.  $d \leq 4$



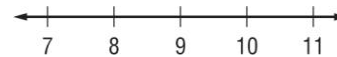
9.  $b \geq 11$



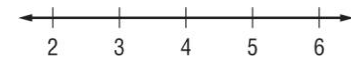
10.  $x > 3$



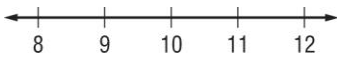
11.  $x < 9$



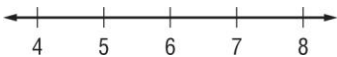
12.  $r \geq 4$



13.  $x > 10$



14.  $x \geq 6$



15.  $x \leq 2$

